




# AUTUMN BREAK

# HOMEWORK

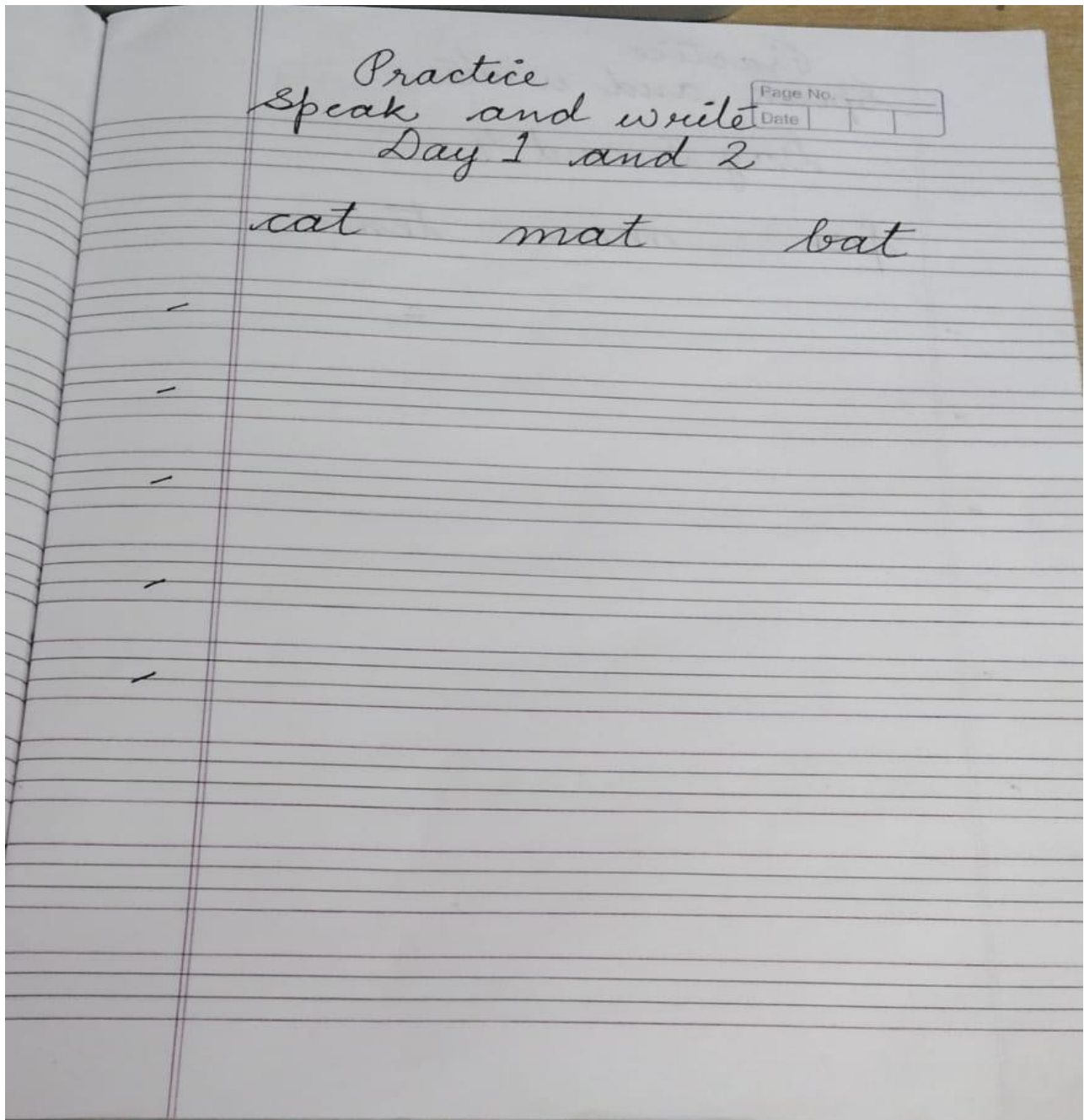


## Balvatika 3

### Subject- English

#### **Poem: Learn two Rhymes**

1. Butter song
2. Twinkle-Twinkle
3. Practice phonic sounds (A to Z)  
<https://youtube.com/watch?v=draRzWLZ784&feature=shared>
4. Learn and write alphabets capital and small letters in cursive twice in your notebook.
5. Practice like this in your notebook.



Practice  
Speak and write

Page No.	
Date	

Day 3 and 4

pen men ten



Practice  
Speak and write

Page No.			
Date			

Day 5 and 6

cop top mop

-

-

-

-

-

Practice  
Speak and write

Date			
No.			

Day 7 and 8

sub      sub      tub

Practice  
Speak and write

Page No. \_\_\_\_\_

Date \_\_\_\_\_

Day 9 and 10

tin

pin

bin

-

-

-

-

-

## विषय: हिन्दी

कविताएँ:

तीन कविताएँ याद करो |

- नाच मोर का सबको भाता |
- लाल टमाटर
- बारिश आई |

स्वर गीत अ से अः तक |

वर्णमाला याद करो और लिखो अ से ज तक और दो बार अपनी कॉपी में लिखो |

## Subject: Maths

- Learn and Write forward counting 1 to 50. (Twice in your notebook)
- Learn and Write backward counting 50 to 1. (Twice in your notebook)
- After or Before



Name \_\_\_\_\_



Before and After - Numbers 1 - 10



Write the numbers that come before and after the number given. Color.

_____ 8 _____ 🍏   🍏   🍏   🍏	_____ 3 _____ 🍏   🍏   🍏   🍏
_____ 5 _____ 🍏   🍏   🍏   🍏	_____ 9 _____ 🍏   🍏   🍏   🍏
_____ 2 _____ 🍏   🍏   🍏   🍏	_____ 7 _____ 🍏   🍏   🍏   🍏
_____ 4 _____ _____	_____ 6 _____ _____

**Subject: EVS**

**1. Activity Sheet of Action verbs and Learn it.**

<https://whatistheurl.com>

Name : \_\_\_\_\_

Date : \_\_\_\_\_

**Action Verbs**

Q. Match the verbs in the word bank with the correct picture.

**run   brush   skip   eat   read   kick**



<https://whatistheurl.com>

Please visit our site for worksheets and charts <https://whatistheurl.com/>



## Learn:

- Names of 5 Colours
- Name of 5 Fruits
- Names of 5 Vegetables
- Kendriya Vidyalaya Prayer
- National Anthem

## Class 1<sup>st</sup>

### Subject: English

1. Write one page of handwriting daily.
2. Revise all the work done in notebook.
3. Revise phonics.
4. Project work –
  - Roll no 1 to 10 - make a hanging model of days of week.
  - Roll no 11 to 20 make a hanging model on seasons.
  - Roll no 21 to 30 – make a hanging model on months of year.
  - Roll no 31 to 42 – make a Vegetable and fruit chart.
5. Make a family Puppet.(follow the instructions from page 46).  
<https://youtu.be/MhnAKjTgTOg?si=6-T-VOq8MefgYRW5>

### विषय: हिंदी

१. प्रतिदिन एक पेज सुलेख लिखो।
२. विभिन्न जानवरों के मुखोटे बनाओ।
३. सारंगी किताब का पेज नंबर ४१, ४२ किताब में ही करो।
४. कॉपी में कराया गया कार्य का अभ्यास करो।

### Subject: Maths

- 1 .Write and learn reverse counting 20-1.
2. Revise all the work done.
3. Make a chart like this upto 20.

1. One 

2. Two 

3. Three 

4. Learn number name upto 20.

**\* Do all the holiday homework in separate notebook**

## **Subject: EVS**

1. Make a sock puppet { worn out socks) or a dhangli doll { from used clothes }  
<https://youtu.be/0sHP-OSjNxw?feature=shared>  
<https://youtu.be/Y6UNKFCvLjQ?feature=shared>  
<https://youtu.be/6a18p2bmi3I?feature=shared>
2. Learn the spellings of names of animals done in your copy. Also practice to read them.
3. Follow the link and make a simple model of a plant.  
<https://www.primarythemepark.com/2020/03/parts-of-a-plant-activity/>
4. Make the record of food /dishes eaten by you in a week in the following table.  
After the vacations, discuss with your teacher whether you had a healthy diet or not.

## **MY PLATE :**



DAY/DATE	BREAKFAST	LUNCH	EVENING SNACKS	DINNER
23-10-23/MONDAY				
24-10-23/TUESDAY				
25-10-23/WEDNESDAY				
26-10-23/THURSDAY				
27-10-23/FRIDAY				
28-10-23/SATURDAY				
29-10-23/SUNDAY				

## Class 2<sup>nd</sup>

### Subject: English

- \* Practice one page handwriting daily in separate NB.
- \* Learn Poems My Bicycle and It is fun.
- \* Read two stories and write their headings, authors and Moral you get from them.
- \* Make model of any one Mode of transport.
- \* Learn work done in English notebook.

### विषय: हिंदी

1. प्रतिदिन हिंदी की पुस्तक से एक पृष्ठ पढ़ें।
2. चींटा, टिल्लू जी कविता का अभिनय के साथ अभ्यास करें।
3. A4 पृष्ठ पर दशहरा त्यौहार से संबंधित चित्र बनाओ व इससे संबंधित पाँच वाक्य लिखो।
4. विभिन्न रंगों के फ्लैश कार्ड बनाकर रंगों के नाम लिखो।

### Subject: EVS

1. Paste pictures of our helpers (people who help us) on A4 size paper
2. Write 5-7 sentences on your favourite festival and draw picture related to festival.
3. Paste pictures of different kinds of plants like tree, shrubs herbs climbers and creepers.
4. Make your favourite toy from paper origami and sticks.
5. Learn and write animals and their home, young ones and sound.

Subject: Maths

Name: \_\_\_\_\_

**1. Find the sum.**

$$\begin{array}{r} 1) \quad 15 \\ + \quad 99 \\ \hline \\ \hline \end{array}$$

$$\begin{array}{r} 2) \quad 52 \\ + \quad 78 \\ \hline \\ \hline \end{array}$$

$$\begin{array}{r} 3) \quad 74 \\ + \quad 67 \\ \hline \\ \hline \end{array}$$

$$\begin{array}{r} 4) \quad 6 \\ + \quad 85 \\ \hline \\ \hline \end{array}$$

$$\begin{array}{r} 5) \quad 97 \\ + \quad 56 \\ \hline \\ \hline \end{array}$$

$$\begin{array}{r} 6) \quad 84 \\ + \quad 36 \\ \hline \\ \hline \end{array}$$

$$\begin{array}{r} 7) \quad 54 \\ + \quad 88 \\ \hline \\ \hline \end{array}$$

$$\begin{array}{r} 8) \quad 74 \\ + \quad 96 \\ \hline \\ \hline \end{array}$$

$$\begin{array}{r} 9) \quad 98 \\ + \quad 93 \\ \hline \\ \hline \end{array}$$

$$\begin{array}{r} 10) \quad 19 \\ + \quad 92 \\ \hline \\ \hline \end{array}$$

$$\begin{array}{r} 11) \quad 53 \\ + \quad 67 \\ \hline \\ \hline \end{array}$$

$$\begin{array}{r} 12) \quad 44 \\ + \quad 98 \\ \hline \\ \hline \end{array}$$

$$\begin{array}{r} 13) \quad 92 \\ + \quad 8 \\ \hline \\ \hline \end{array}$$

$$\begin{array}{r} 14) \quad 54 \\ + \quad 57 \\ \hline \\ \hline \end{array}$$

$$\begin{array}{r} 15) \quad 44 \\ + \quad 78 \\ \hline \\ \hline \end{array}$$

$$\begin{array}{r} 16) \quad 81 \\ + \quad 39 \\ \hline \\ \hline \end{array}$$

$$\begin{array}{r} 17) \quad 87 \\ + \quad 95 \\ \hline \\ \hline \end{array}$$

$$\begin{array}{r} 18) \quad 86 \\ + \quad 54 \\ \hline \\ \hline \end{array}$$

$$\begin{array}{r} 19) \quad 48 \\ + \quad 92 \\ \hline \\ \hline \end{array}$$

$$\begin{array}{r} 20) \quad 61 \\ + \quad 99 \\ \hline \\ \hline \end{array}$$



2. Subtract the following :

$$\begin{array}{r} 26 \\ - 18 \\ \hline \end{array}$$

$$\begin{array}{r} 71 \\ - 18 \\ \hline \end{array}$$

$$\begin{array}{r} 71 \\ - 45 \\ \hline \end{array}$$

$$\begin{array}{r} 34 \\ - 18 \\ \hline \end{array}$$

$$\begin{array}{r} 68 \\ - 29 \\ \hline \end{array}$$

$$\begin{array}{r} 24 \\ - 17 \\ \hline \end{array}$$

$$\begin{array}{r} 34 \\ - 15 \\ \hline \end{array}$$

$$\begin{array}{r} 35 \\ - 27 \\ \hline \end{array}$$

$$\begin{array}{r} 51 \\ - 44 \\ \hline \end{array}$$

$$\begin{array}{r} 66 \\ - 57 \\ \hline \end{array}$$

$$\begin{array}{r} 51 \\ - 24 \\ \hline \end{array}$$

$$\begin{array}{r} 27 \\ - 18 \\ \hline \end{array}$$

$$\begin{array}{r} 74 \\ - 38 \\ \hline \end{array}$$

$$\begin{array}{r} 24 \\ - 15 \\ \hline \end{array}$$

$$\begin{array}{r} 32 \\ - 16 \\ \hline \end{array}$$

$$\begin{array}{r} 75 \\ - 48 \\ \hline \end{array}$$

$$\begin{array}{r} 66 \\ - 59 \\ \hline \end{array}$$

$$\begin{array}{r} 70 \\ - 63 \\ \hline \end{array}$$

$$\begin{array}{r} 94 \\ - 86 \\ \hline \end{array}$$

$$\begin{array}{r} 44 \\ - 28 \\ \hline \end{array}$$

### 3. Answer the word problem by solving :

- a) David bought three toys for his children the prices were Rs.25, Rs. 22 andRs.18.  
How much did he pay in total ?

In total he paid Rs. \_\_\_\_\_

- b) Anne had 64 marbles and Peter had 35. How many did they have in total.

In total the have \_\_\_\_\_ marbles.

- c) There are 12 pencils in a drawer. Dan placed 89 more pencils in the drawer.  
How many pencils are now there in total.

In total there are \_\_\_\_\_ pencils.
















d) In the jungle, there are 15 monkeys, 23 foxes and 14 bears. How many animals are there in the jungle?

In the jungle there are \_\_\_\_\_ animals.




e) Milly picked 52 flowers on Monday, 44 flowers on Tuesday and 16 flowers on Wednesday. How many flowers did she pick altogether?

She pick altogether \_\_\_\_\_ flowers.

## 2. SUBTRACTION PROBLEMS :

1)	<p>Newton catches 25  in a lake.</p> <p>He puts 13  back.</p> <p>How many  does he have now? _____</p>	
2)	<p>There are 39  in a tree.</p> <p>A loud noise scares 16  away.</p> <p>How many  are left in the tree? _____</p>	
3)	<p>Tyger has 46  .</p> <p>Sally has 21  .</p> <p>How many more  does Tyger have? _____</p>	
4)	<p>There are 47  in a parking lot.</p> <p>32 of the  drive away.</p> <p>How many  are left? _____</p>	
5)	<p>There are 37  for sale in a pet shop.</p> <p>25  get sold.</p> <p>How many  are left in the shop? _____</p>	

## 3. Make a model of weighing machine.

<p>Roll No 1 to 10</p> 	<p>Roll No 11 to 20</p> 
<p>Roll No 21 to 30</p> 	<p>Roll No 31 to 40</p> 